





Use the array provided to solve each problem.


1) $49 \times 25 =$




2) $44 \times 45 =$




3) $38 \times 18 =$



4) $34 \times 34 =$



5) $35 \times 25 =$



6) $33 \times 37 =$



Answers

1. _____

2. _____

3. _____

4. _____

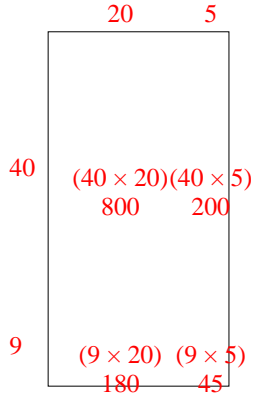
5. _____

6. _____

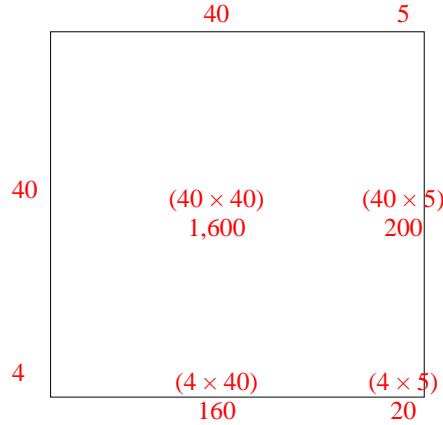


Use the array provided to solve each problem.

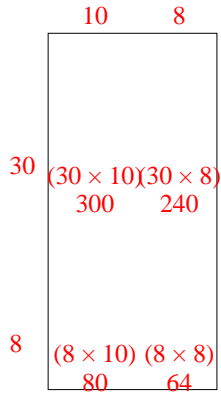
1) $49 \times 25 =$



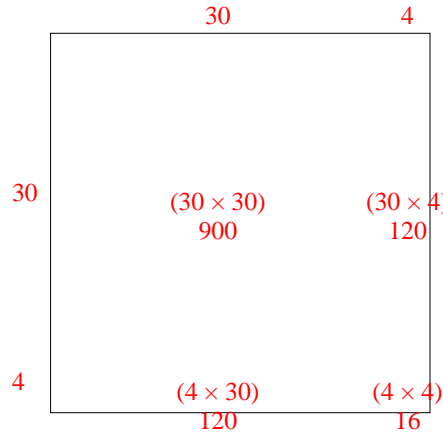
2) $44 \times 45 =$



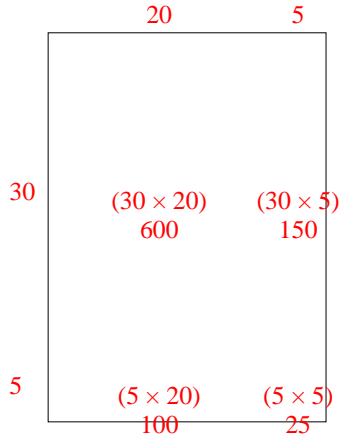
3) $38 \times 18 =$



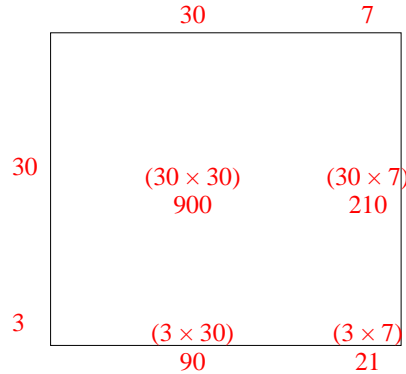
4) $34 \times 34 =$



5) $35 \times 25 =$



6) $33 \times 37 =$



Answers

1. **1,225**

2. **1,980**

3. **684**

4. **1,156**

5. **875**

6. **1,221**